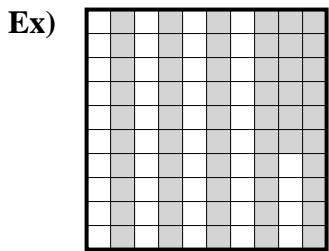


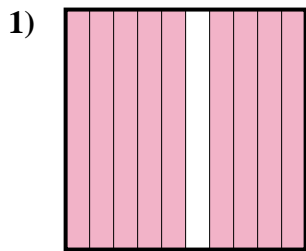


Determine the value written as a fraction , decimal & a percent.

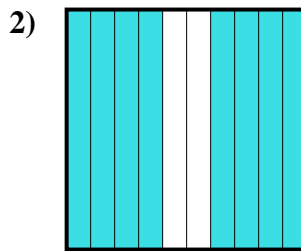
Answers



fraction $\frac{56}{100}$
 decimal 0.56
 percent 56



fraction _____
 decimal _____
 percent _____



fraction _____
 decimal _____
 percent _____

Ex. $\frac{56}{100}$ 0.56 56%

1. _____

2. _____

3. _____

4. _____

5. _____

6. _____

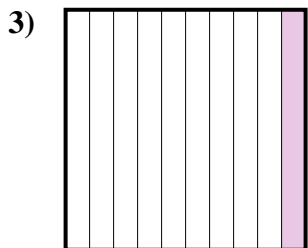
7. _____

8. _____


9. _____

10. _____

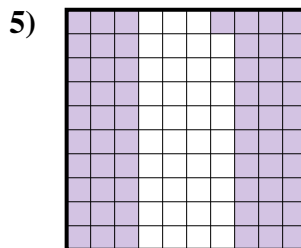
11. _____



fraction _____
 decimal _____
 percent _____




fraction _____
 decimal _____
 percent _____




fraction _____
 decimal _____
 percent _____



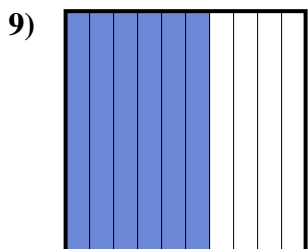
fraction _____
 decimal _____
 percent _____



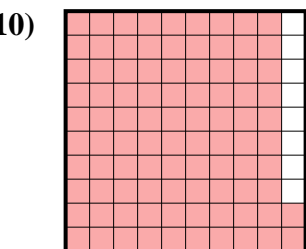
fraction _____
 decimal _____
 percent _____



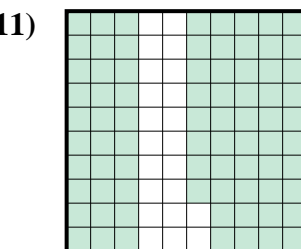
fraction _____
 decimal _____
 percent _____



fraction _____
 decimal _____
 percent _____



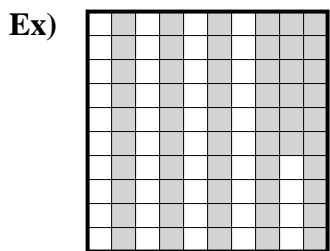
fraction _____
 decimal _____
 percent _____



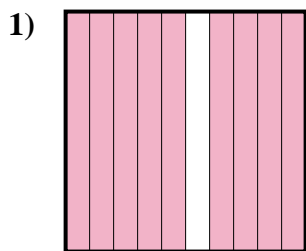
fraction _____
 decimal _____
 percent _____



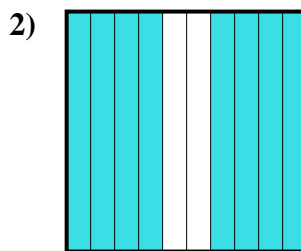
Determine the value written as a fraction , decimal & a percent.



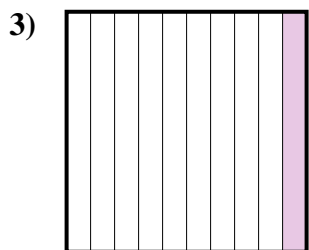
fraction $\frac{56}{100}$
 decimal 0.56
 percent 56




fraction $\frac{9}{10}$
 decimal 0.9
 percent 90



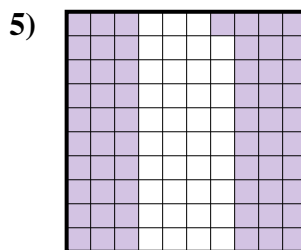
fraction $\frac{8}{10}$
 decimal 0.8
 percent 80




fraction $\frac{1}{10}$
 decimal 0.1
 percent 10




fraction $\frac{7}{100}$
 decimal 0.07
 percent 7




fraction $\frac{61}{100}$
 decimal 0.61
 percent 61



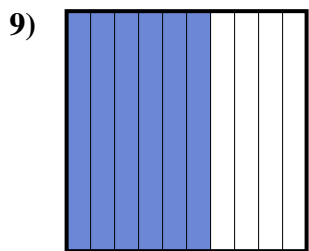
fraction $\frac{5}{10}$
 decimal 0.5
 percent 50



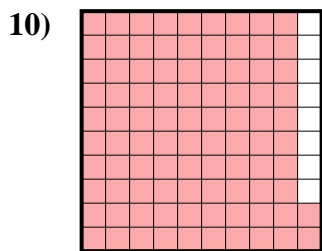
fraction $\frac{4}{10}$
 decimal 0.4
 percent 40



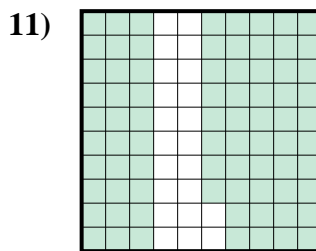
fraction $\frac{3}{10}$
 decimal 0.3
 percent 30



fraction $\frac{6}{10}$
 decimal 0.6
 percent 60



fraction $\frac{92}{100}$
 decimal 0.92
 percent 92



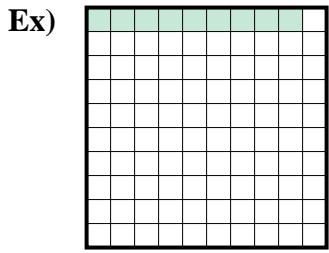
fraction $\frac{78}{100}$
 decimal 0.78
 percent 78

Answers

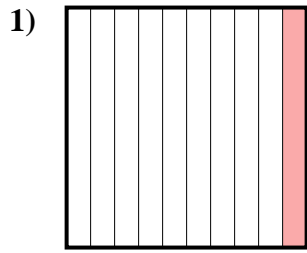
| | | | |
|-----|------------------|-------------|------------|
| Ex. | $\frac{56}{100}$ | 0.56 | 56% |
| 1. | $\frac{9}{10}$ | 0.9 | 90% |
| 2. | $\frac{8}{10}$ | 0.8 | 80% |
| 3. | $\frac{1}{10}$ | 0.1 | 10% |
| 4. | $\frac{7}{100}$ | 0.07 | 7% |
| 5. | $\frac{61}{100}$ | 0.61 | 61% |
| 6. | $\frac{5}{10}$ | 0.5 | 50% |
| 7. | $\frac{4}{10}$ | 0.4 | 40% |
| 8. | $\frac{3}{10}$ | 0.3 | 30% |
| 9. | $\frac{6}{10}$ | 0.6 | 60% |
| 10. | $\frac{92}{100}$ | 0.92 | 92% |
| 11. | $\frac{78}{100}$ | 0.78 | 78% |



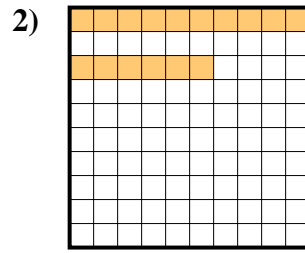
Determine the value written as a fraction , decimal & a percent.



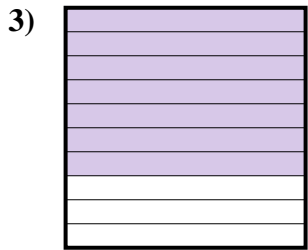
fraction $\frac{9}{100}$
 decimal 0.09
 percent 9



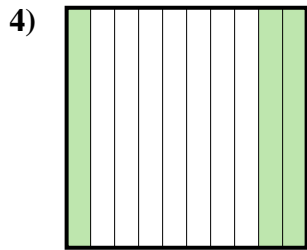
fraction _____
 decimal _____
 percent _____



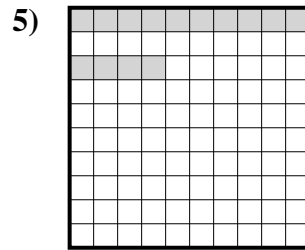
fraction _____
 decimal _____
 percent _____



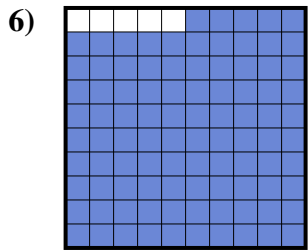
fraction _____
 decimal _____
 percent _____



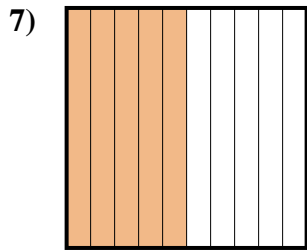
fraction _____
 decimal _____
 percent _____



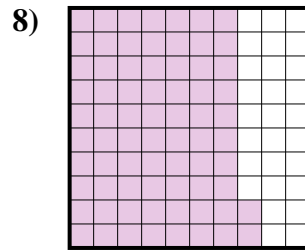
fraction _____
 decimal _____
 percent _____



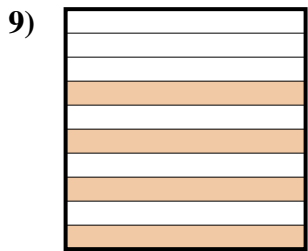
fraction _____
 decimal _____
 percent _____



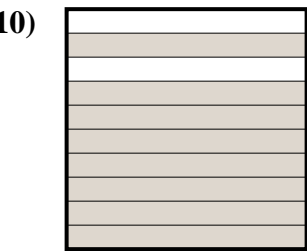
fraction _____
 decimal _____
 percent _____




fraction _____
 decimal _____
 percent _____



fraction _____
 decimal _____
 percent _____



fraction _____
 decimal _____
 percent _____



fraction _____
 decimal _____
 percent _____

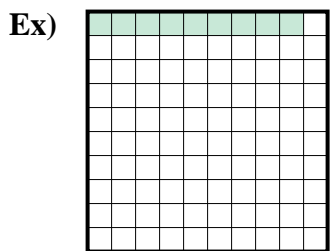
Answers

Ex. $\frac{9}{100}$ 0.09 9%

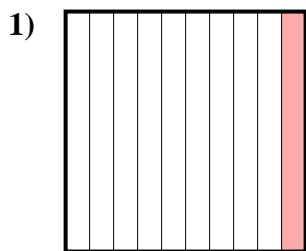
- 1. _____
- 2. _____
- 3. _____
- 4. _____
- 5. _____
- 6. _____
- 7. _____
- 8. _____
- 9. _____
- 10. _____
- 11. _____



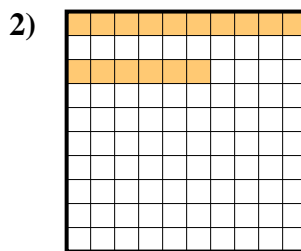
Determine the value written as a fraction , decimal & a percent.



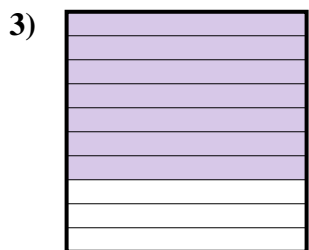
fraction $\frac{9}{100}$
 decimal 0.09
 percent 9



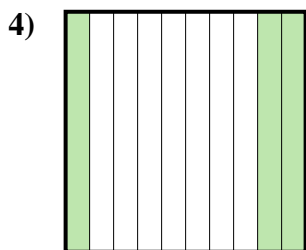
fraction $\frac{1}{10}$
 decimal 0.1
 percent 10



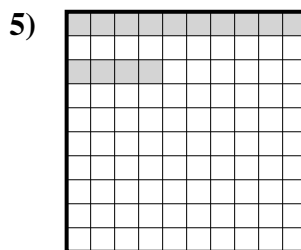
fraction $\frac{16}{100}$
 decimal 0.16
 percent 16



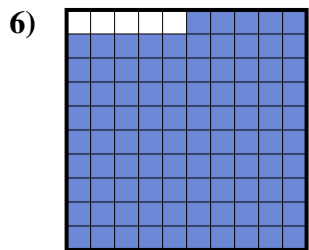
fraction $\frac{7}{10}$
 decimal 0.7
 percent 70



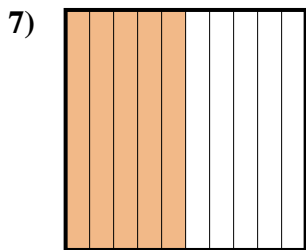
fraction $\frac{3}{10}$
 decimal 0.3
 percent 30



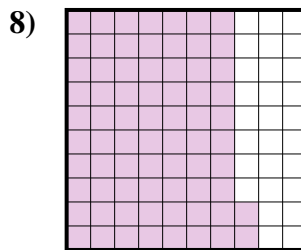
fraction $\frac{14}{100}$
 decimal 0.14
 percent 14



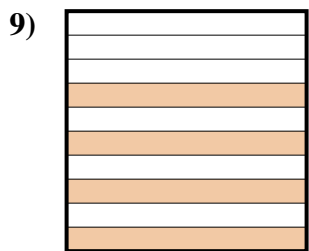
fraction $\frac{95}{100}$
 decimal 0.95
 percent 95



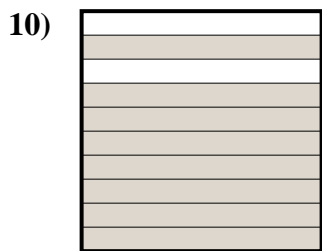
fraction $\frac{5}{10}$
 decimal 0.5
 percent 50




fraction $\frac{72}{100}$
 decimal 0.72
 percent 72



fraction $\frac{4}{10}$
 decimal 0.4
 percent 40



fraction $\frac{8}{10}$
 decimal 0.8
 percent 80



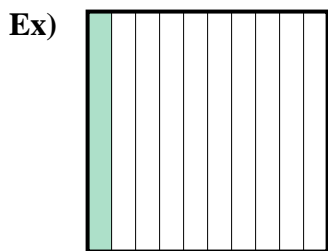
fraction $\frac{2}{10}$
 decimal 0.2
 percent 20

Answers

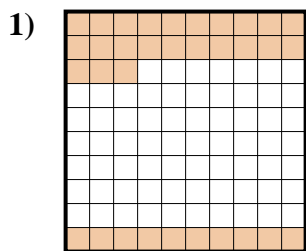
| | | | |
|-----|------------------|-------------|------------|
| Ex. | $\frac{9}{100}$ | 0.09 | 9% |
| 1. | $\frac{1}{10}$ | 0.1 | 10% |
| 2. | $\frac{16}{100}$ | 0.16 | 16% |
| 3. | $\frac{7}{10}$ | 0.7 | 70% |
| 4. | $\frac{3}{10}$ | 0.3 | 30% |
| 5. | $\frac{14}{100}$ | 0.14 | 14% |
| 6. | $\frac{95}{100}$ | 0.95 | 95% |
| 7. | $\frac{5}{10}$ | 0.5 | 50% |
| 8. | $\frac{72}{100}$ | 0.72 | 72% |
| 9. | $\frac{4}{10}$ | 0.4 | 40% |
| 10. | $\frac{8}{10}$ | 0.8 | 80% |
| 11. | $\frac{2}{10}$ | 0.2 | 20% |



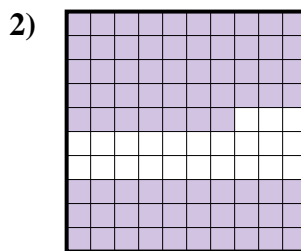
Determine the value written as a fraction , decimal & a percent.



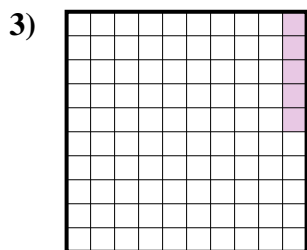
fraction $\frac{1}{10}$
 decimal 0.1
 percent 10



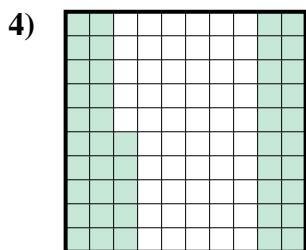
fraction _____
 decimal _____
 percent _____




fraction _____
 decimal _____
 percent _____



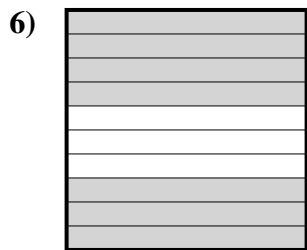
fraction _____
 decimal _____
 percent _____



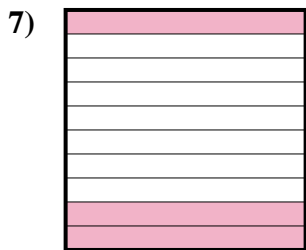
fraction _____
 decimal _____
 percent _____



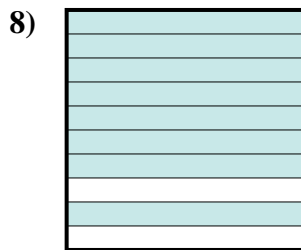
fraction _____
 decimal _____
 percent _____



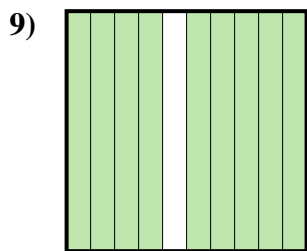
fraction _____
 decimal _____
 percent _____



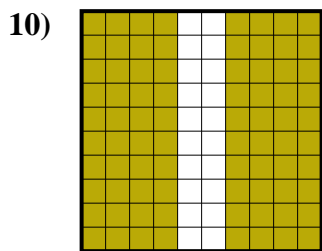
fraction _____
 decimal _____
 percent _____



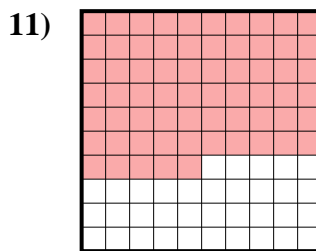
fraction _____
 decimal _____
 percent _____



fraction _____
 decimal _____
 percent _____



fraction _____
 decimal _____
 percent _____



fraction _____
 decimal _____
 percent _____

Answers

Ex. $\frac{1}{10}$ 0.1 10%

1. _____

2. _____

3. _____

4. _____

5. _____

6. _____

7. _____

8. _____

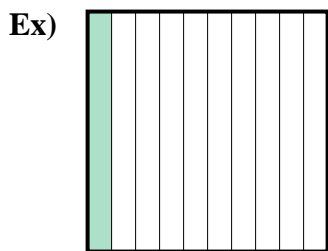
9. _____

10. _____

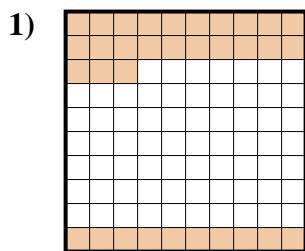
11. _____



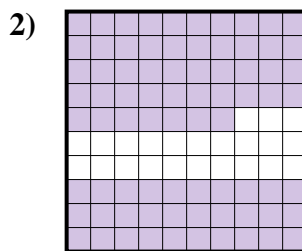
Determine the value written as a fraction , decimal & a percent.



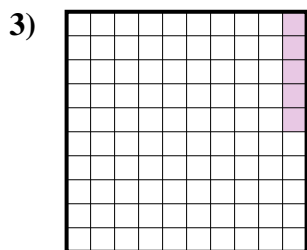
fraction $\frac{1}{10}$
 decimal 0.1
 percent 10



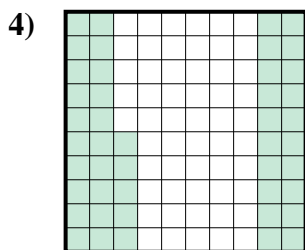
fraction $\frac{33}{100}$
 decimal 0.33
 percent 33




fraction $\frac{77}{100}$
 decimal 0.77
 percent 77




fraction $\frac{5}{100}$
 decimal 0.05
 percent 5




fraction $\frac{45}{100}$
 decimal 0.45
 percent 45




fraction $\frac{2}{10}$
 decimal 0.2
 percent 20



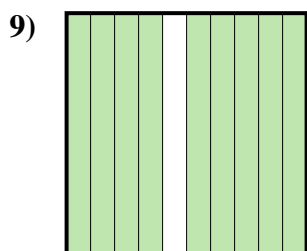
fraction $\frac{7}{10}$
 decimal 0.7
 percent 70



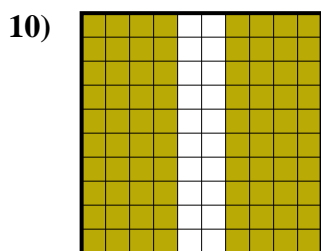
fraction $\frac{3}{10}$
 decimal 0.3
 percent 30



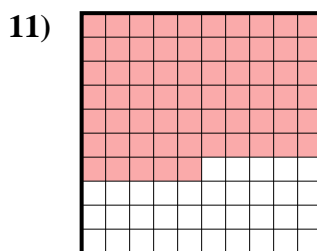
fraction $\frac{8}{10}$
 decimal 0.8
 percent 80



fraction $\frac{9}{10}$
 decimal 0.9
 percent 90



fraction $\frac{80}{100}$
 decimal 0.80
 percent 80



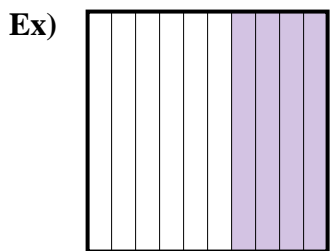
fraction $\frac{65}{100}$
 decimal 0.65
 percent 65

Answers

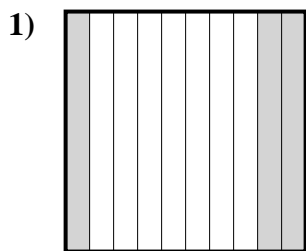
| | | | |
|-----|------------------|-------------|------------|
| Ex. | $\frac{1}{10}$ | 0.1 | 10% |
| 1. | $\frac{33}{100}$ | 0.33 | 33% |
| 2. | $\frac{77}{100}$ | 0.77 | 77% |
| 3. | $\frac{5}{100}$ | 0.05 | 5% |
| 4. | $\frac{45}{100}$ | 0.45 | 45% |
| 5. | $\frac{2}{10}$ | 0.2 | 20% |
| 6. | $\frac{7}{10}$ | 0.7 | 70% |
| 7. | $\frac{3}{10}$ | 0.3 | 30% |
| 8. | $\frac{8}{10}$ | 0.8 | 80% |
| 9. | $\frac{9}{10}$ | 0.9 | 90% |
| 10. | $\frac{80}{100}$ | 0.80 | 80% |
| 11. | $\frac{65}{100}$ | 0.65 | 65% |



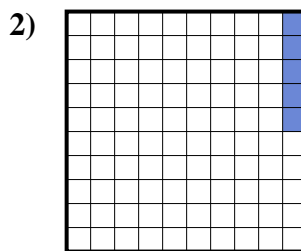
Determine the value written as a fraction , decimal & a percent.



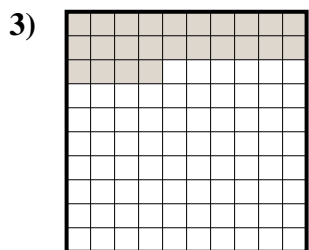
fraction $\frac{4}{10}$
 decimal 0.4
 percent 40



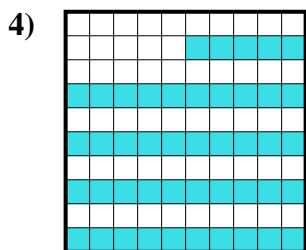
fraction _____
 decimal _____
 percent _____



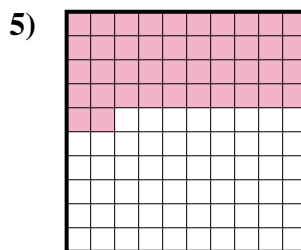
fraction _____
 decimal _____
 percent _____



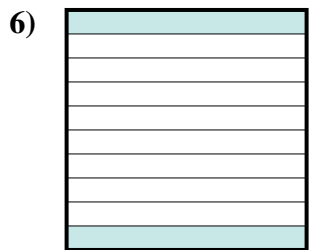
fraction _____
 decimal _____
 percent _____



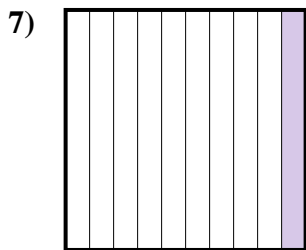
fraction _____
 decimal _____
 percent _____



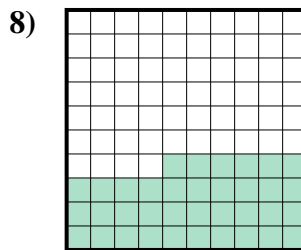
fraction _____
 decimal _____
 percent _____



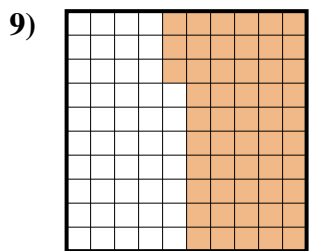
fraction _____
 decimal _____
 percent _____



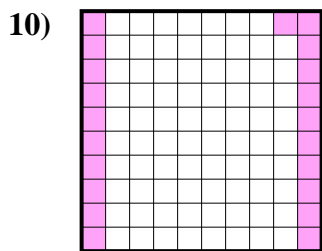
fraction _____
 decimal _____
 percent _____



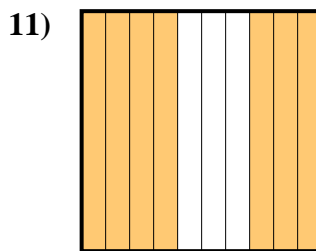
fraction _____
 decimal _____
 percent _____



fraction _____
 decimal _____
 percent _____



fraction _____
 decimal _____
 percent _____



fraction _____
 decimal _____
 percent _____

Answers

Ex. $\frac{4}{10}$ 0.4 40%

1. _____

2. _____

3. _____

4. _____

5. _____

6. _____

7. _____

8. _____

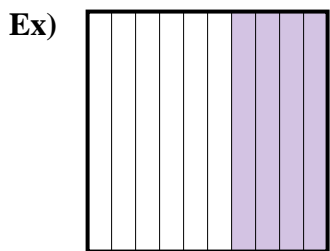
9. _____

10. _____

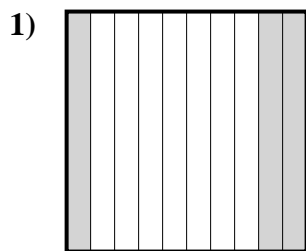
11. _____



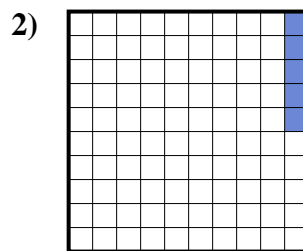
Determine the value written as a fraction , decimal & a percent.



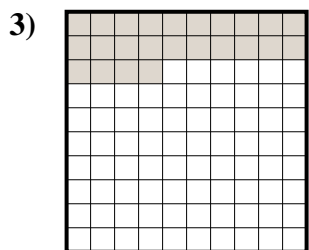
fraction $\frac{4}{10}$
 decimal 0.4
 percent 40



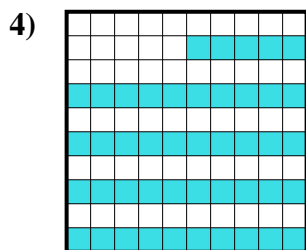
fraction $\frac{3}{10}$
 decimal 0.3
 percent 30



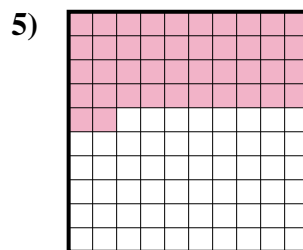
fraction $\frac{5}{100}$
 decimal 0.05
 percent 5



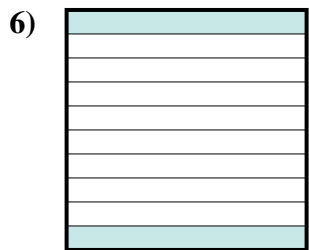
fraction $\frac{24}{100}$
 decimal 0.24
 percent 24



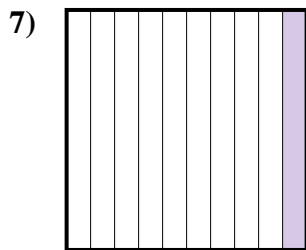
fraction $\frac{45}{100}$
 decimal 0.45
 percent 45



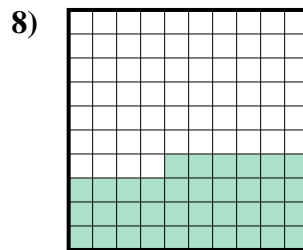
fraction $\frac{42}{100}$
 decimal 0.42
 percent 42



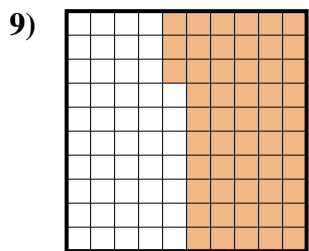
fraction $\frac{2}{10}$
 decimal 0.2
 percent 20



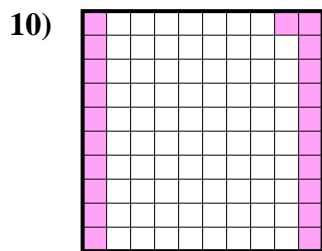
fraction $\frac{1}{10}$
 decimal 0.1
 percent 10



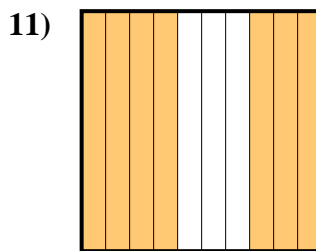
fraction $\frac{36}{100}$
 decimal 0.36
 percent 36



fraction $\frac{53}{100}$
 decimal 0.53
 percent 53



fraction $\frac{21}{100}$
 decimal 0.21
 percent 21



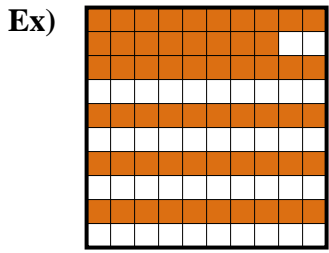
fraction $\frac{7}{10}$
 decimal 0.7
 percent 70

Answers

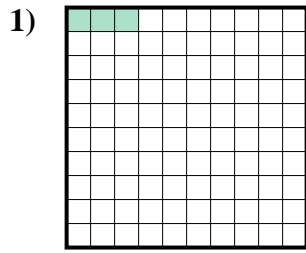
| | | | |
|-----|------------------|-------------|------------|
| Ex. | $\frac{4}{10}$ | 0.4 | 40% |
| 1. | $\frac{3}{10}$ | 0.3 | 30% |
| 2. | $\frac{5}{100}$ | 0.05 | 5% |
| 3. | $\frac{24}{100}$ | 0.24 | 24% |
| 4. | $\frac{45}{100}$ | 0.45 | 45% |
| 5. | $\frac{42}{100}$ | 0.42 | 42% |
| 6. | $\frac{2}{10}$ | 0.2 | 20% |
| 7. | $\frac{1}{10}$ | 0.1 | 10% |
| 8. | $\frac{36}{100}$ | 0.36 | 36% |
| 9. | $\frac{53}{100}$ | 0.53 | 53% |
| 10. | $\frac{21}{100}$ | 0.21 | 21% |
| 11. | $\frac{7}{10}$ | 0.7 | 70% |



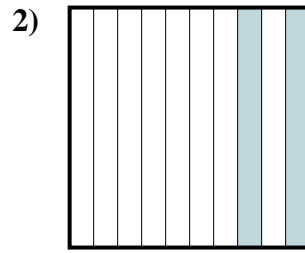
Determine the value written as a fraction , decimal & a percent.



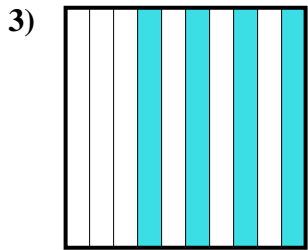
fraction $\frac{58}{100}$
 decimal 0.58
 percent 58



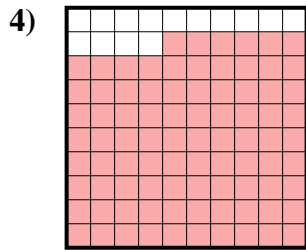
fraction $\frac{3}{100}$
 decimal 0.03
 percent 3



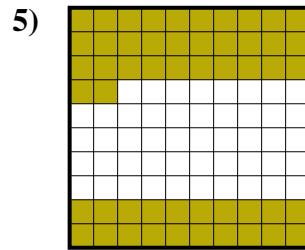
fraction $\frac{2}{10}$
 decimal 0.2
 percent 20



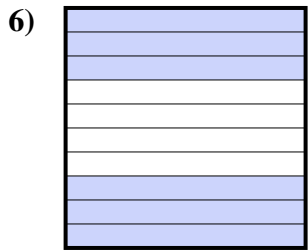
fraction $\frac{4}{10}$
 decimal 0.4
 percent 40



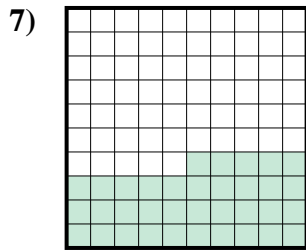
fraction $\frac{86}{100}$
 decimal 0.86
 percent 86



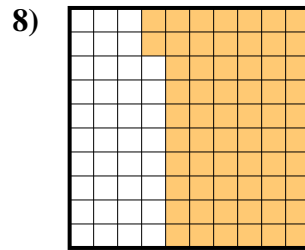
fraction $\frac{52}{100}$
 decimal 0.52
 percent 52



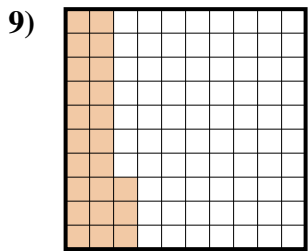
fraction $\frac{6}{10}$
 decimal 0.6
 percent 60



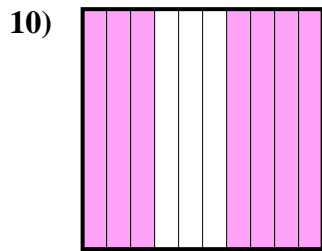
fraction $\frac{35}{100}$
 decimal 0.35
 percent 35



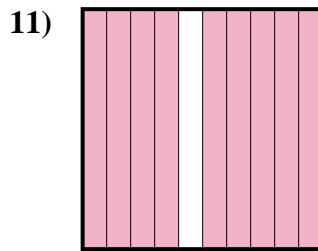
fraction $\frac{62}{100}$
 decimal 0.62
 percent 62



fraction $\frac{23}{100}$
 decimal 0.23
 percent 23



fraction $\frac{7}{10}$
 decimal 0.7
 percent 70



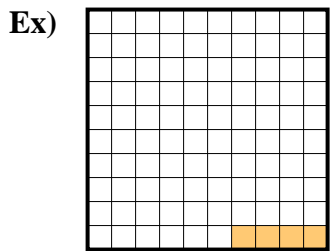
fraction $\frac{9}{10}$
 decimal 0.9
 percent 90

Answers

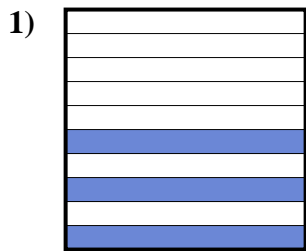
| | | | |
|-----|------------------|-------------|------------|
| Ex. | $\frac{58}{100}$ | 0.58 | 58% |
| 1. | $\frac{3}{100}$ | 0.03 | 3% |
| 2. | $\frac{2}{10}$ | 0.2 | 20% |
| 3. | $\frac{4}{10}$ | 0.4 | 40% |
| 4. | $\frac{86}{100}$ | 0.86 | 86% |
| 5. | $\frac{52}{100}$ | 0.52 | 52% |
| 6. | $\frac{6}{10}$ | 0.6 | 60% |
| 7. | $\frac{35}{100}$ | 0.35 | 35% |
| 8. | $\frac{62}{100}$ | 0.62 | 62% |
| 9. | $\frac{23}{100}$ | 0.23 | 23% |
| 10. | $\frac{7}{10}$ | 0.7 | 70% |
| 11. | $\frac{9}{10}$ | 0.9 | 90% |



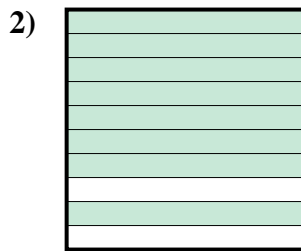
Determine the value written as a fraction , decimal & a percent.




fraction $\frac{4}{100}$
 decimal 0.04
 percent 4



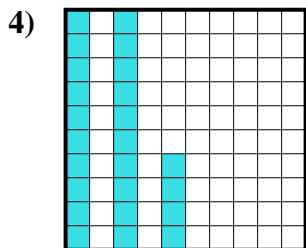
fraction _____
 decimal _____
 percent _____



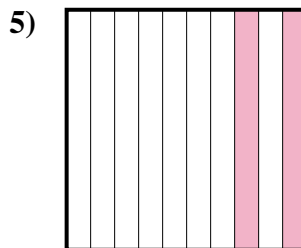
fraction _____
 decimal _____
 percent _____



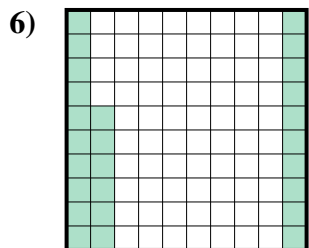
fraction _____
 decimal _____
 percent _____



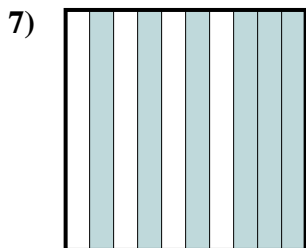
fraction _____
 decimal _____
 percent _____



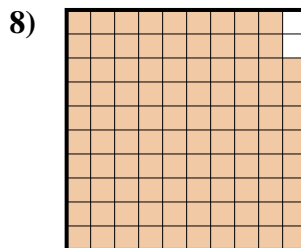
fraction _____
 decimal _____
 percent _____



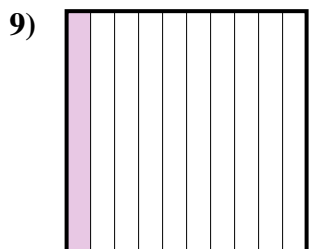
fraction _____
 decimal _____
 percent _____



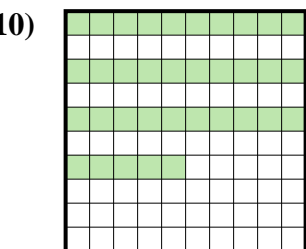
fraction _____
 decimal _____
 percent _____



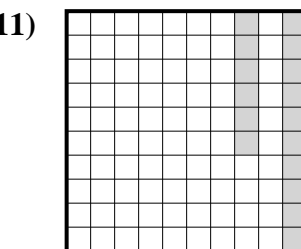
fraction _____
 decimal _____
 percent _____



fraction _____
 decimal _____
 percent _____



fraction _____
 decimal _____
 percent _____



fraction _____
 decimal _____
 percent _____

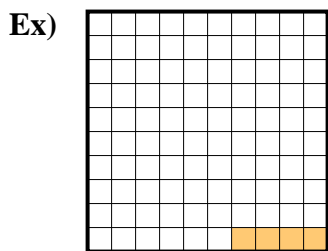
Answers

Ex. $\frac{4}{100}$ 0.04 4%


- 1. _____
- 2. _____
- 3. _____
- 4. _____
- 5. _____
- 6. _____
- 7. _____
- 8. _____
- 9. _____
- 10. _____
- 11. _____



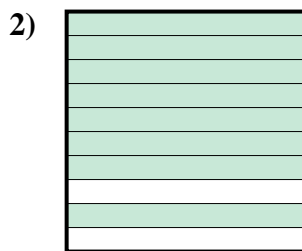
Determine the value written as a fraction , decimal & a percent.




fraction $\frac{4}{100}$
 decimal 0.04
 percent 4



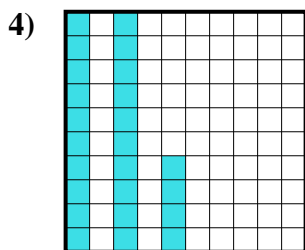
fraction $\frac{3}{10}$
 decimal 0.3
 percent 30



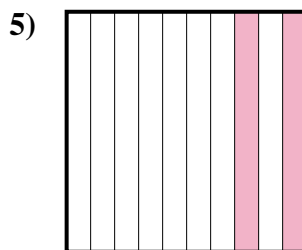
fraction $\frac{8}{10}$
 decimal 0.8
 percent 80



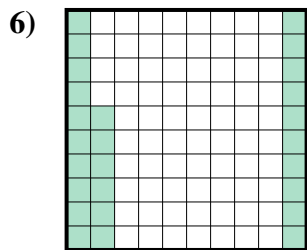
fraction $\frac{7}{10}$
 decimal 0.7
 percent 70



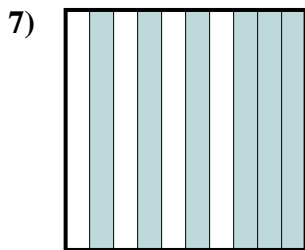
fraction $\frac{24}{100}$
 decimal 0.24
 percent 24



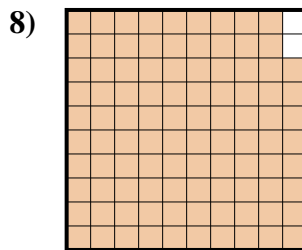
fraction $\frac{2}{10}$
 decimal 0.2
 percent 20



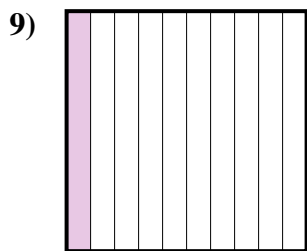
fraction $\frac{26}{100}$
 decimal 0.26
 percent 26



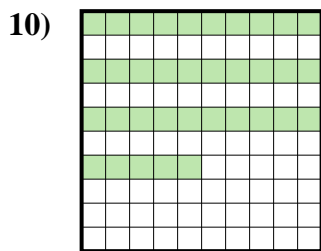
fraction $\frac{6}{10}$
 decimal 0.6
 percent 60



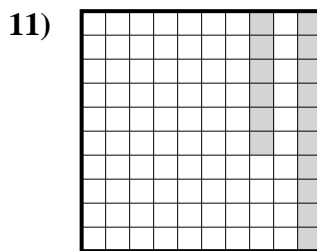
fraction $\frac{98}{100}$
 decimal 0.98
 percent 98



fraction $\frac{1}{10}$
 decimal 0.1
 percent 10



fraction $\frac{35}{100}$
 decimal 0.35
 percent 35



fraction $\frac{16}{100}$
 decimal 0.16
 percent 16

Answers


| | | | |
|-----|------------------|-------------|------------|
| Ex. | $\frac{4}{100}$ | 0.04 | 4% |
| 1. | $\frac{3}{10}$ | 0.3 | 30% |
| 2. | $\frac{8}{10}$ | 0.8 | 80% |
| 3. | $\frac{7}{10}$ | 0.7 | 70% |
| 4. | $\frac{24}{100}$ | 0.24 | 24% |
| 5. | $\frac{2}{10}$ | 0.2 | 20% |
| 6. | $\frac{26}{100}$ | 0.26 | 26% |
| 7. | $\frac{6}{10}$ | 0.6 | 60% |
| 8. | $\frac{98}{100}$ | 0.98 | 98% |
| 9. | $\frac{1}{10}$ | 0.1 | 10% |
| 10. | $\frac{35}{100}$ | 0.35 | 35% |
| 11. | $\frac{16}{100}$ | 0.16 | 16% |



Determine the value written as a fraction , decimal & a percent.


Answers

Ex)



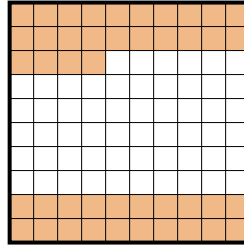
fraction $\frac{9}{10}$
decimal 0.9
percent 90

1)



fraction _____
decimal _____
percent _____

2)



fraction _____
decimal _____
percent _____

Ex. $\frac{9}{10}$ 0.9 90%

1. _____

2. _____

3. _____

4. _____

5. _____

6. _____

7. _____

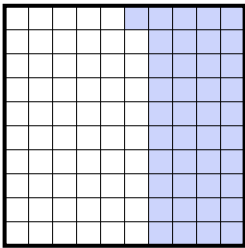
8. _____

9. _____

10. _____


11. _____

3)



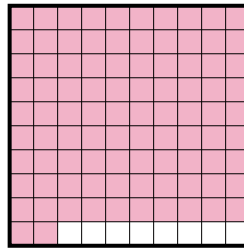
fraction _____
decimal _____
percent _____

4)



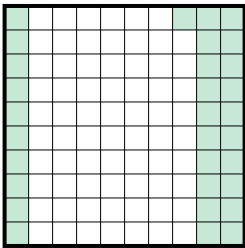
fraction _____
decimal _____
percent _____

5)



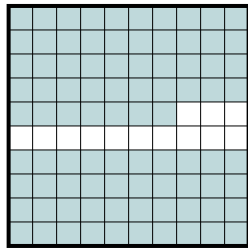
fraction _____
decimal _____
percent _____

6)



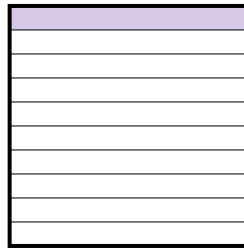
fraction _____
decimal _____
percent _____

7)



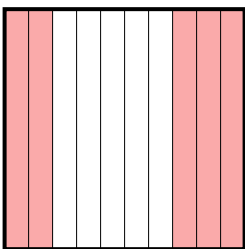
fraction _____
decimal _____
percent _____

8)



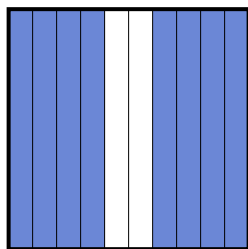
fraction _____
decimal _____
percent _____

9)



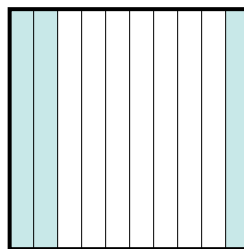
fraction _____
decimal _____
percent _____

10)



fraction _____
decimal _____
percent _____


11)




fraction _____
decimal _____
percent _____



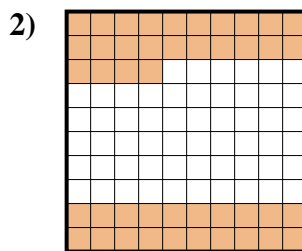
Determine the value written as a fraction , decimal & a percent.



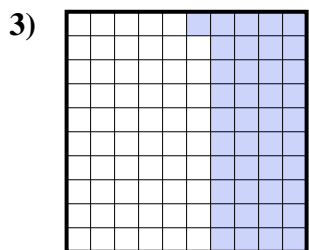
fraction $\frac{9}{10}$
 decimal 0.9
 percent 90




fraction $\frac{2}{10}$
 decimal 0.2
 percent 20



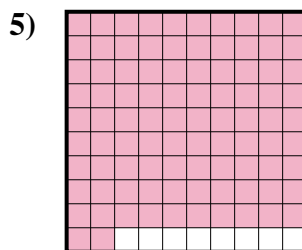
fraction $\frac{44}{100}$
 decimal 0.44
 percent 44



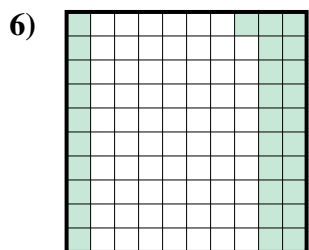
fraction $\frac{41}{100}$
 decimal 0.41
 percent 41



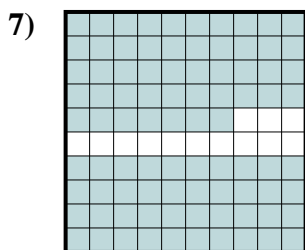
fraction $\frac{6}{10}$
 decimal 0.6
 percent 60




fraction $\frac{92}{100}$
 decimal 0.92
 percent 92



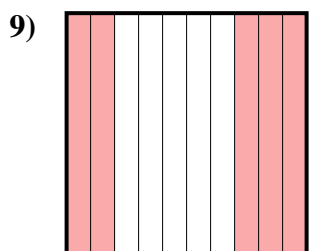
fraction $\frac{31}{100}$
 decimal 0.31
 percent 31



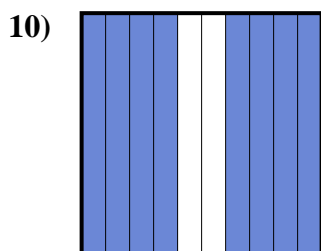
fraction $\frac{87}{100}$
 decimal 0.87
 percent 87



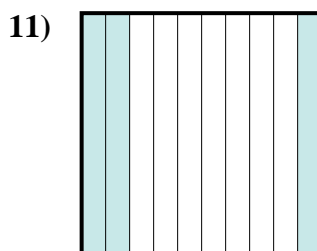
fraction $\frac{1}{10}$
 decimal 0.1
 percent 10



fraction $\frac{5}{10}$
 decimal 0.5
 percent 50



fraction $\frac{8}{10}$
 decimal 0.8
 percent 80



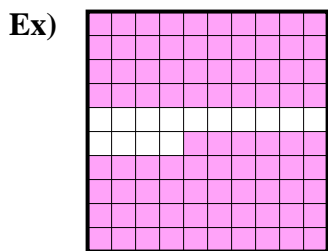
fraction $\frac{3}{10}$
 decimal 0.3
 percent 30

Answers


| | | | |
|-----|------------------|-------------|------------|
| Ex. | $\frac{9}{10}$ | 0.9 | 90% |
| 1. | $\frac{2}{10}$ | 0.2 | 20% |
| 2. | $\frac{44}{100}$ | 0.44 | 44% |
| 3. | $\frac{41}{100}$ | 0.41 | 41% |
| 4. | $\frac{6}{10}$ | 0.6 | 60% |
| 5. | $\frac{92}{100}$ | 0.92 | 92% |
| 6. | $\frac{31}{100}$ | 0.31 | 31% |
| 7. | $\frac{87}{100}$ | 0.87 | 87% |
| 8. | $\frac{1}{10}$ | 0.1 | 10% |
| 9. | $\frac{5}{10}$ | 0.5 | 50% |
| 10. | $\frac{8}{10}$ | 0.8 | 80% |
| 11. | $\frac{3}{10}$ | 0.3 | 30% |



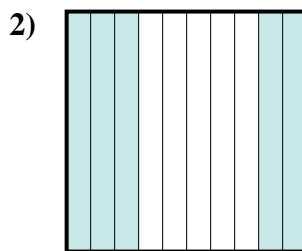
Determine the value written as a fraction , decimal & a percent.



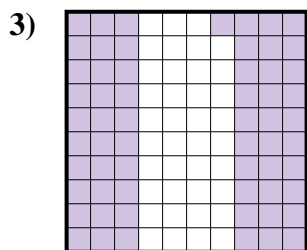
fraction $\frac{86}{100}$
 decimal 0.86
 percent 86



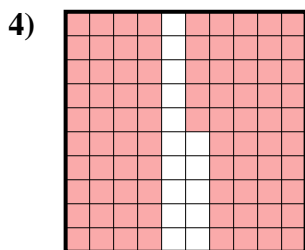
fraction $\frac{2}{10}$
 decimal 0.2
 percent 20



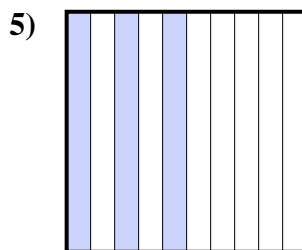
fraction $\frac{5}{10}$
 decimal 0.5
 percent 50



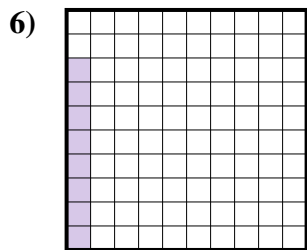
fraction $\frac{61}{100}$
 decimal 0.61
 percent 61



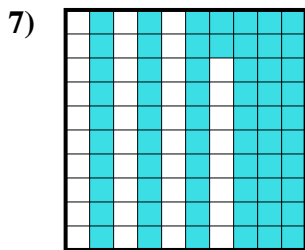
fraction $\frac{85}{100}$
 decimal 0.85
 percent 85



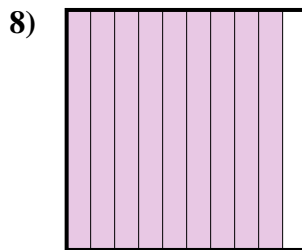
fraction $\frac{3}{10}$
 decimal 0.3
 percent 30




fraction $\frac{8}{100}$
 decimal 0.08
 percent 8



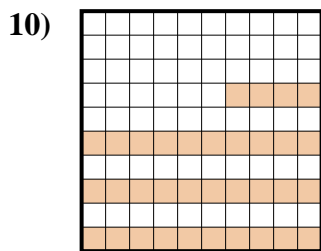
fraction $\frac{62}{100}$
 decimal 0.62
 percent 62



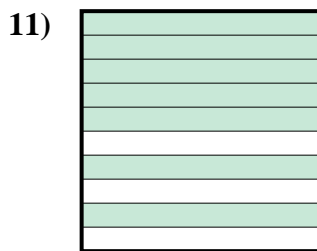
fraction $\frac{9}{10}$
 decimal 0.9
 percent 90



fraction $\frac{1}{10}$
 decimal 0.1
 percent 10



fraction $\frac{34}{100}$
 decimal 0.34
 percent 34



fraction $\frac{7}{10}$
 decimal 0.7
 percent 70

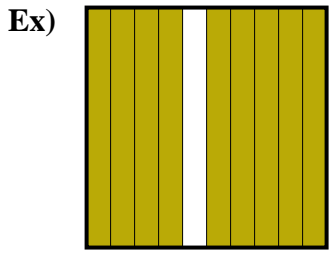
Answers

| | | | |
|-----|------------------|-------------|------------|
| Ex. | $\frac{86}{100}$ | 0.86 | 86% |
| 1. | $\frac{2}{10}$ | 0.2 | 20% |
| 2. | $\frac{5}{10}$ | 0.5 | 50% |
| 3. | $\frac{61}{100}$ | 0.61 | 61% |
| 4. | $\frac{85}{100}$ | 0.85 | 85% |
| 5. | $\frac{3}{10}$ | 0.3 | 30% |
| 6. | $\frac{8}{100}$ | 0.08 | 8% |
| 7. | $\frac{62}{100}$ | 0.62 | 62% |
| 8. | $\frac{9}{10}$ | 0.9 | 90% |
| 9. | $\frac{1}{10}$ | 0.1 | 10% |
| 10. | $\frac{34}{100}$ | 0.34 | 34% |
| 11. | $\frac{7}{10}$ | 0.7 | 70% |

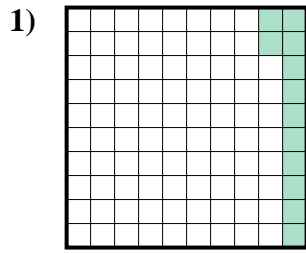


Determine the value written as a fraction , decimal & a percent.

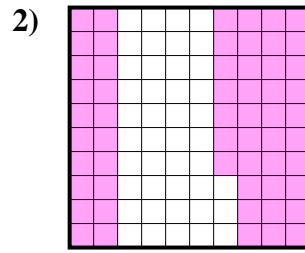
Answers



fraction $\frac{9}{10}$
 decimal 0.9
 percent 90



fraction _____
 decimal _____
 percent _____



fraction _____
 decimal _____
 percent _____

Ex. $\frac{9}{10}$ 0.9 90%

1. _____

2. _____

3. _____

4. _____

5. _____

6. _____

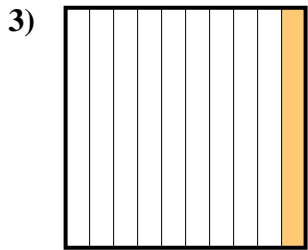
7. _____

8. _____

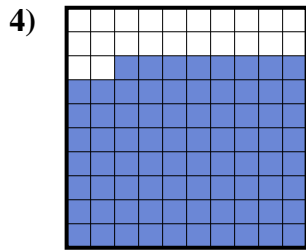
9. _____

10. _____

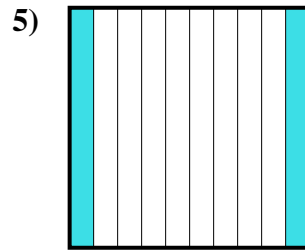
11. _____



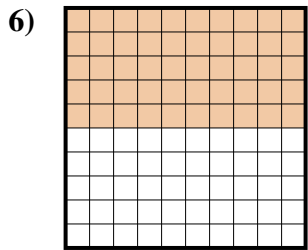
fraction _____
 decimal _____
 percent _____



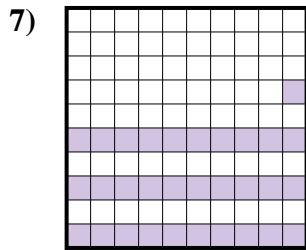
fraction _____
 decimal _____
 percent _____



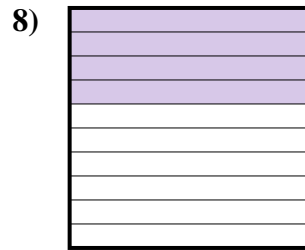
fraction _____
 decimal _____
 percent _____



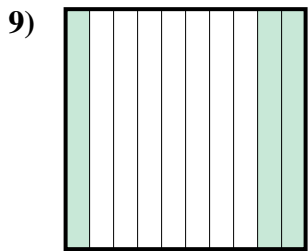
fraction _____
 decimal _____
 percent _____



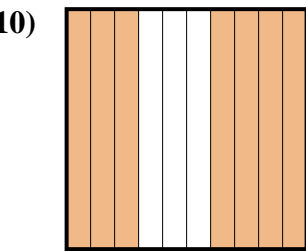
fraction _____
 decimal _____
 percent _____



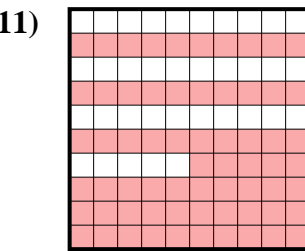
fraction _____
 decimal _____
 percent _____



fraction _____
 decimal _____
 percent _____



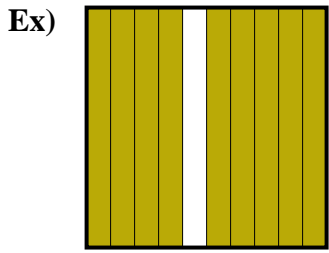
fraction _____
 decimal _____
 percent _____



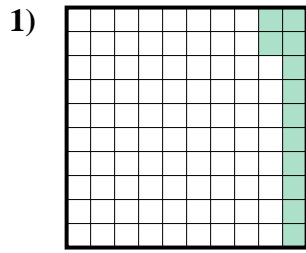
fraction _____
 decimal _____
 percent _____



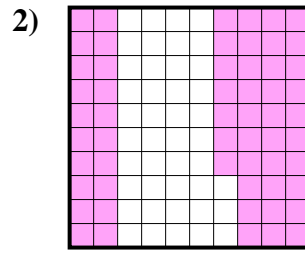
Determine the value written as a fraction , decimal & a percent.



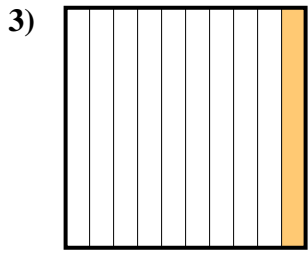
fraction $\frac{9}{10}$
 decimal 0.9
 percent 90



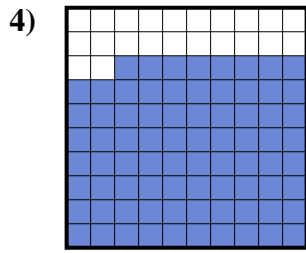
fraction $\frac{12}{100}$
 decimal 0.12
 percent 12



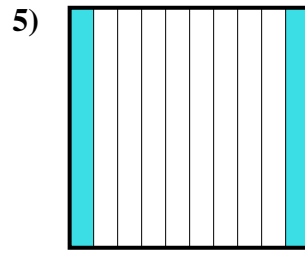
fraction $\frac{57}{100}$
 decimal 0.57
 percent 57



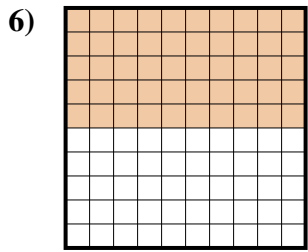
fraction $\frac{1}{10}$
 decimal 0.1
 percent 10



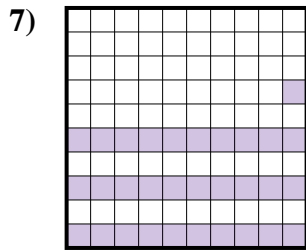
fraction $\frac{78}{100}$
 decimal 0.78
 percent 78



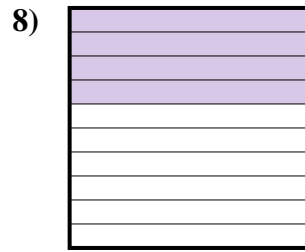
fraction $\frac{2}{10}$
 decimal 0.2
 percent 20



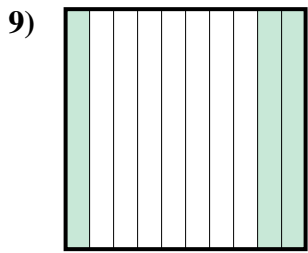
fraction $\frac{50}{100}$
 decimal 0.50
 percent 50



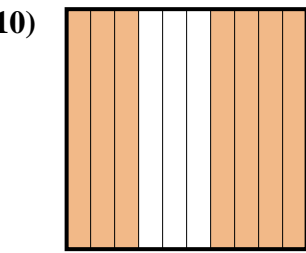
fraction $\frac{31}{100}$
 decimal 0.31
 percent 31



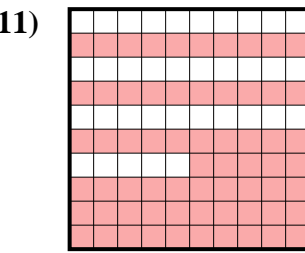
fraction $\frac{4}{10}$
 decimal 0.4
 percent 40



fraction $\frac{3}{10}$
 decimal 0.3
 percent 30



fraction $\frac{7}{10}$
 decimal 0.7
 percent 70



fraction $\frac{65}{100}$
 decimal 0.65
 percent 65

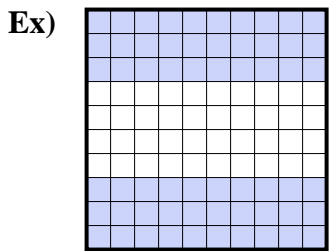
Answers

- Ex. $\frac{9}{10}$ **0.9** **90%**
 1. $\frac{12}{100}$ **0.12** **12%**
 2. $\frac{57}{100}$ **0.57** **57%**
 3. $\frac{1}{10}$ **0.1** **10%**
 4. $\frac{78}{100}$ **0.78** **78%**
 5. $\frac{2}{10}$ **0.2** **20%**
 6. $\frac{50}{100}$ **0.50** **50%**
 7. $\frac{31}{100}$ **0.31** **31%**
 8. $\frac{4}{10}$ **0.4** **40%**
 9. $\frac{3}{10}$ **0.3** **30%**
 10. $\frac{7}{10}$ **0.7** **70%**
 11. $\frac{65}{100}$ **0.65** **65%**

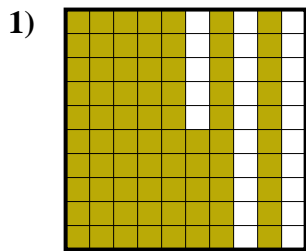


Determine the value written as a fraction , decimal & a percent.

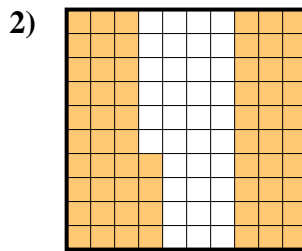
Answers



fraction $\frac{60}{100}$
 decimal 0.60
 percent 60



fraction _____
 decimal _____
 percent _____



fraction _____
 decimal _____
 percent _____

Ex. $\frac{60}{100}$ 0.60 60%

1. _____

2. _____

3. _____

4. _____

5. _____

6. _____

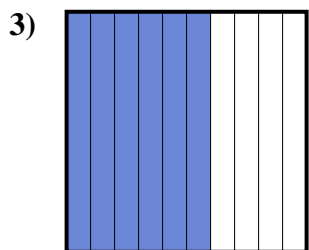
7. _____

8. _____

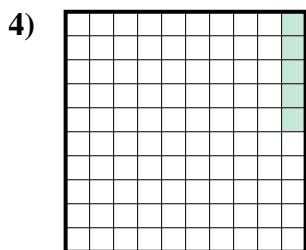
9. _____

10. _____

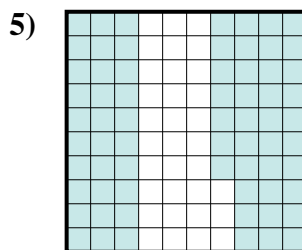
11. _____



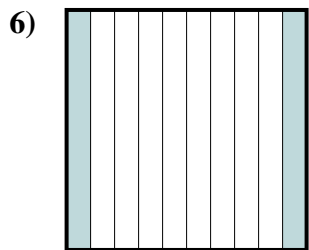
fraction _____
 decimal _____
 percent _____



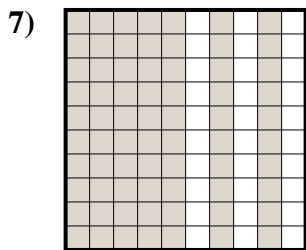
fraction _____
 decimal _____
 percent _____



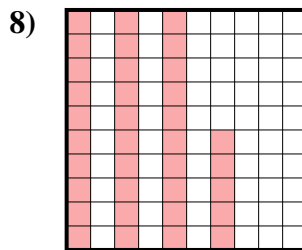
fraction _____
 decimal _____
 percent _____



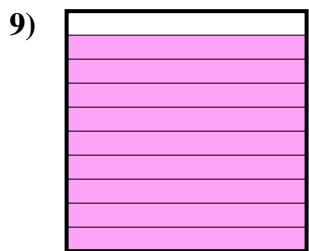
fraction _____
 decimal _____
 percent _____




fraction _____
 decimal _____
 percent _____



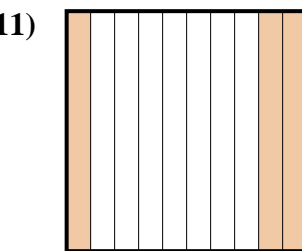
fraction _____
 decimal _____
 percent _____



fraction _____
 decimal _____
 percent _____



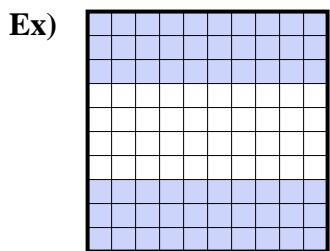
fraction _____
 decimal _____
 percent _____



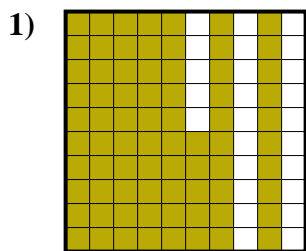
fraction _____
 decimal _____
 percent _____



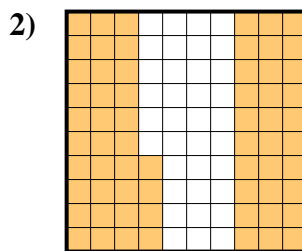
Determine the value written as a fraction , decimal & a percent.



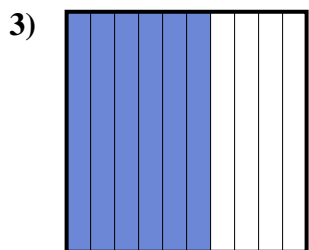
fraction $\frac{60}{100}$
 decimal 0.60
 percent 60



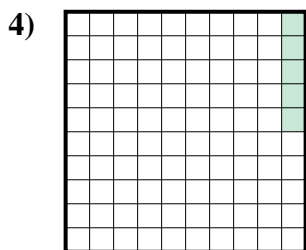
fraction $\frac{75}{100}$
 decimal 0.75
 percent 75



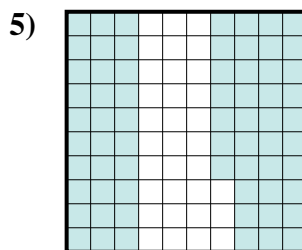
fraction $\frac{64}{100}$
 decimal 0.64
 percent 64



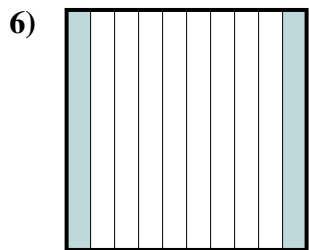
fraction $\frac{6}{10}$
 decimal 0.6
 percent 60



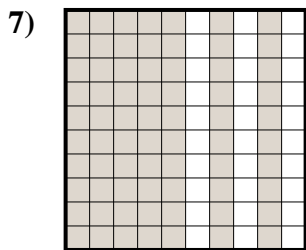
fraction $\frac{5}{100}$
 decimal 0.05
 percent 5



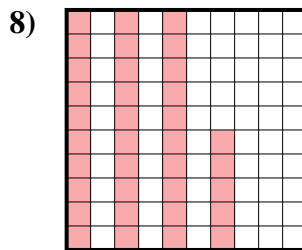
fraction $\frac{67}{100}$
 decimal 0.67
 percent 67




fraction $\frac{2}{10}$
 decimal 0.2
 percent 20




fraction $\frac{70}{100}$
 decimal 0.70
 percent 70



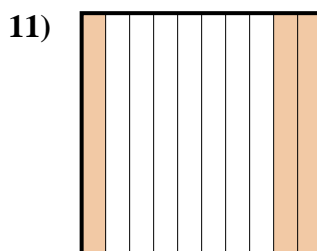
fraction $\frac{35}{100}$
 decimal 0.35
 percent 35



fraction $\frac{9}{10}$
 decimal 0.9
 percent 90



fraction $\frac{8}{10}$
 decimal 0.8
 percent 80



fraction $\frac{3}{10}$
 decimal 0.3
 percent 30

Answers

- Ex. $\frac{60}{100}$ **0.60** **60%**
 1. $\frac{75}{100}$ **0.75** **75%**
 2. $\frac{64}{100}$ **0.64** **64%**
 3. $\frac{6}{10}$ **0.6** **60%**
 4. $\frac{5}{100}$ **0.05** **5%**
 5. $\frac{67}{100}$ **0.67** **67%**
 6. $\frac{2}{10}$ **0.2** **20%**
 7. $\frac{70}{100}$ **0.70** **70%**
 8. $\frac{35}{100}$ **0.35** **35%**
 9. $\frac{9}{10}$ **0.9** **90%**
 10. $\frac{8}{10}$ **0.8** **80%**
 11. $\frac{3}{10}$ **0.3** **30%**